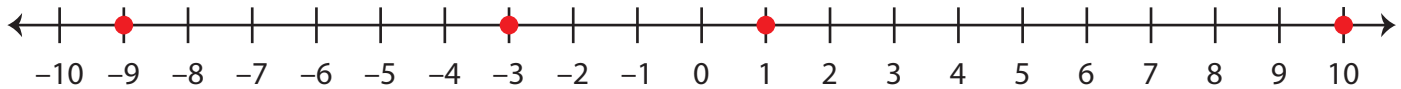


Integers on a Number Line

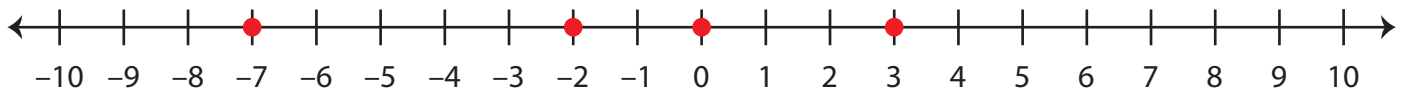
Answer Key

A) Locate the integers on the number line.

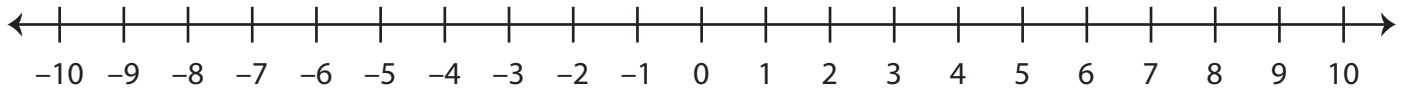
- 1) a) 1 b) 10 c) -3 d) -9



- 2) a) -2 b) 3 c) 0 d) -7



B) Observe the number line and answer the questions.



- 1) What integer is 1 unit to the left of -7 ? -8
- 2) What integer is 9 units to the right of 0 ? 9
- 3) What integer is 3 units to the right of -3 ? 0
- 4) What integer is 8 units to the left of 4 ? -4
- 5) What integer is 4 units to the right of 3 ? 7
- 6) What integer is 2 units to the right of -8 ? -6
- 7) What integer is 5 units to the left of 2 ? -3