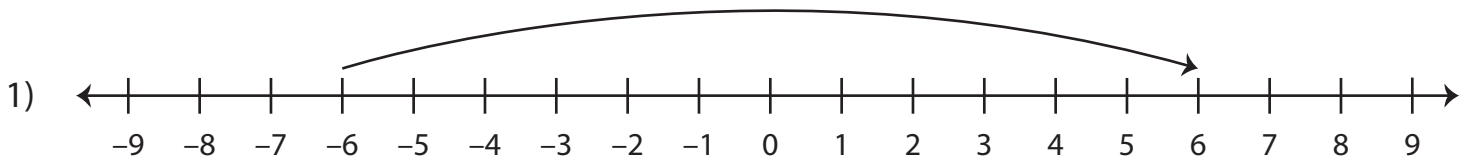


# Writing Addition Sentences

Write the addition equation represented on each number line.



\_\_\_\_\_ + \_\_\_\_\_ = \_\_\_\_\_

2)

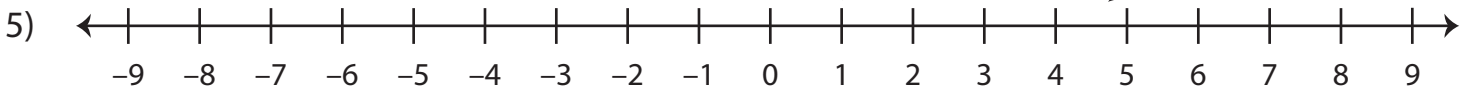
# Preview

3)

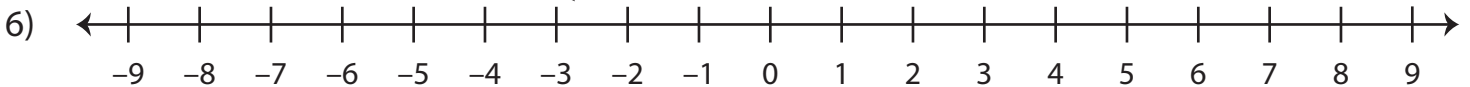
**Become a member to unlock  
unrestricted access to both printable  
and online worksheets.**

4)

[www.tutoringhour.com](http://www.tutoringhour.com)



\_\_\_\_\_ + \_\_\_\_\_ = \_\_\_\_\_



\_\_\_\_\_ + \_\_\_\_\_ = \_\_\_\_\_