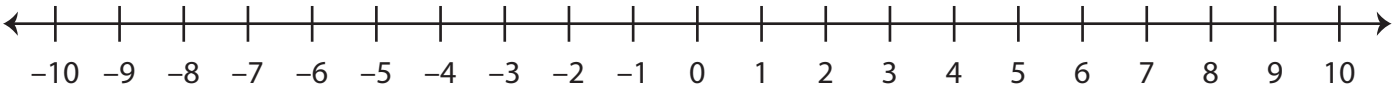


# Ordering Integers on a Number Line

A) Plot the integers on the number line, and write them in increasing order.

1) 5, -9, 2, -4



\_\_\_\_\_

2) -7, 3, 0, -5

3) \_\_\_\_\_


B) \_\_\_\_\_

1) \_\_\_\_\_

**Preview**

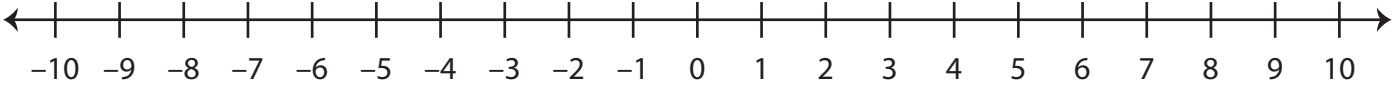
Become a member to unlock  
unrestricted access to both printable  
and online worksheets.

[www.tutoringhour.com](http://www.tutoringhour.com)



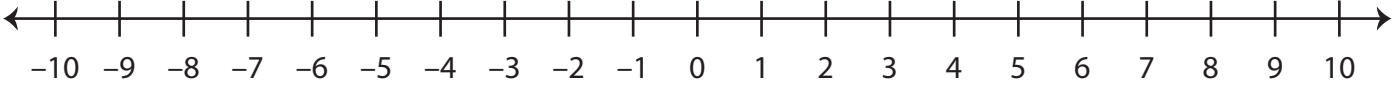
\_\_\_\_\_

2) -5, 8, -4, 0



\_\_\_\_\_

3) 10, -7, 1, -3



\_\_\_\_\_