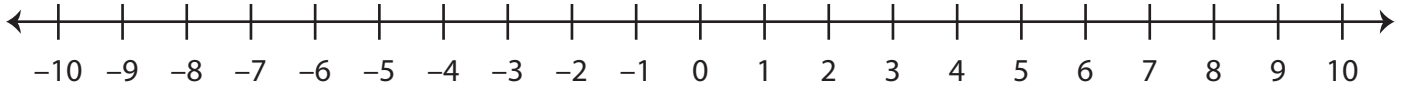


Ordering Integers on a Number Line

A) Plot the integers on the number line, and write them in increasing order.

1) 8, -6, 5, 3



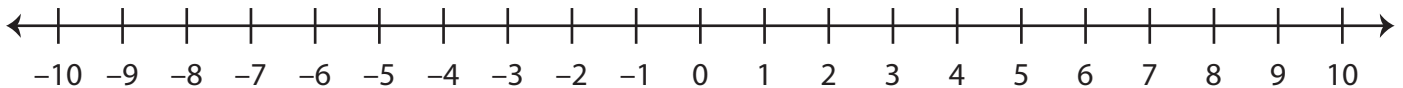
2) 9, 4, -3, -1

3)

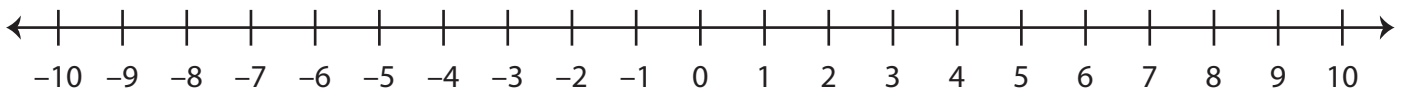
B)

1)

2) 10, -7, 5, -9



3) -8, 7, -3, 4



Preview

Become a member to unlock
unrestricted access to both printable
and online worksheets.

www.tutoringhour.com

