


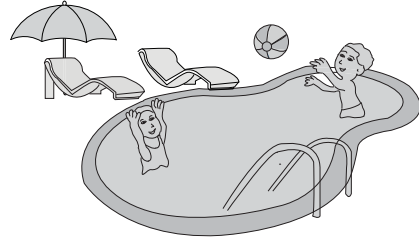
# Estimating Length

Choose the best unit of measurement.

1) The height of the building



2) The depth of the swimming pool



3)

## Preview

Become a member to unlock  
unrestricted access to both printable  
and online worksheets.



[www.tutoringhour.com](http://www.tutoringhour.com)

5)

inches

feet

inches

feet


7) The length of the pen



inches

feet

8) The height of the camel



feet

inches