



Estimating Length

Choose the best unit of measurement.

1) The height of the chessmen



2) The length of the truck



3)

Preview

Become a member to unlock
unrestricted access to both printable
and online worksheets.



www.tutoringhour.com

5)


inches

feet

feet

inches

7) The height of the building



feet

inches

8) The length of the toothpaste



feet

inches