


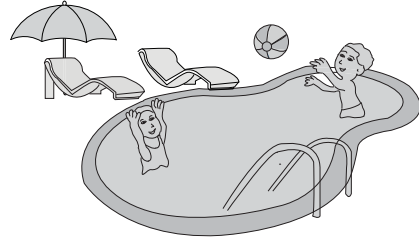
Estimating Length

Choose the best unit of measurement.

1) The height of the building



2) The depth of the swimming pool



3)

Preview

Become a member to unlock
unrestricted access to both printable
and online worksheets.



www.tutoringhour.com

5)

m



cm

cm

m


7) The length of the pen



cm

m

8) The height of the camel



m

cm