



Estimating Length

Choose the best unit of measurement.

1) The height of the chessmen



2) The length of the truck



3)

Preview

Become a member to unlock
unrestricted access to both printable
and online worksheets.



www.tutoringhour.com

5)


cm

m

m

cm

7) The height of the building



m

cm

8) The length of the toothpaste



m

cm