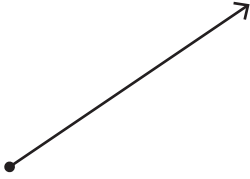


Points, Lines, Rays, and Line Segments


Answer Key

Identify each figure as a point, ray, line, or line segment.

1)

ray

2)

line

3)

line segment

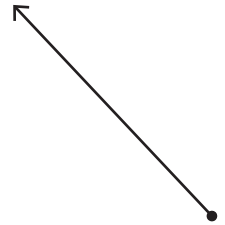
4)

point

5)

line segment

6)

ray

7)

line

8)

ray

9)

point