

# Points, Lines, Rays, and Line Segments

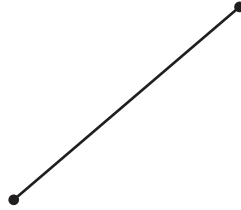
**Answer Key**

Identify each figure as a point, ray, line, or line segment.

1)

**line**

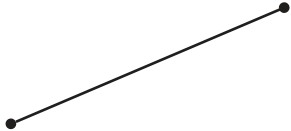
2)

**line segment**

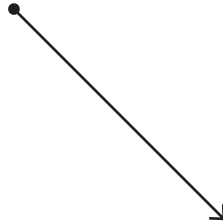
3)

**point**

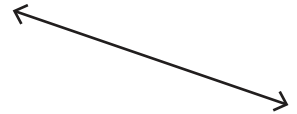
4)

**line segment**

5)

**ray**

6)

**line**

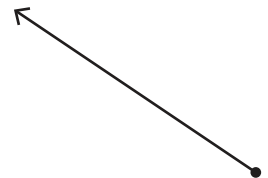
7)

**point**

8)

**line segment**

9)

**ray**