

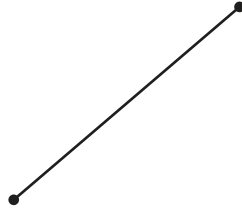
Points, Lines, Rays, and Line Segments

Identify each figure as a point, ray, line, or line segment.

1)



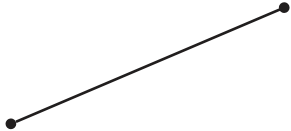
2)



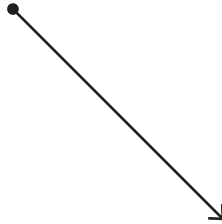
3)



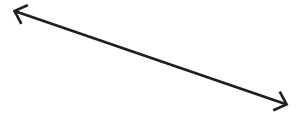
4)



5)



6)



7)



8)



9)

