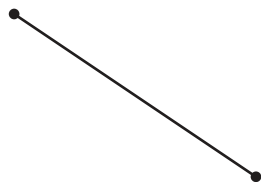


Points, Lines, Rays, and Line Segments

Answer Key

Identify each figure as a point, ray, line, or line segment.

1)



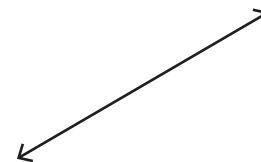
line segment

2)




ray

3)



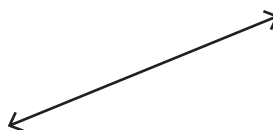
line

4)



ray

5)



line

6)



point

7)



line segment

8)



point

9)



line