
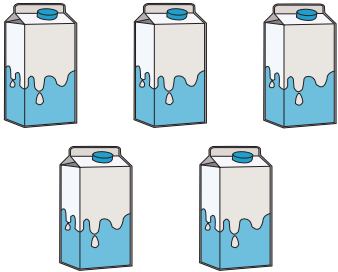
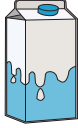





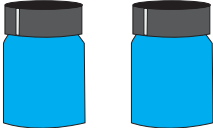
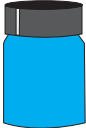


Converting Liters to Milliliters

Write the capacity of each individual container.

1)	 	 = _____ mL
2)	<div style="border: 2px solid red; padding: 10px; text-align: center;"> <h2 style="color: blue;">Preview</h2> <p style="color: blue; font-size: 1.2em;">Become a member to unlock unrestricted access to both printable and online worksheets.</p>  <p style="color: blue;">www.tutoringhour.com</p> </div>	
3)		
4)		
	 	 = _____ mL
5)	 	 = _____ mL