









# Counting Coins

Count the coins in each set and write the total value in cents.

<p>1)</p> 	<p>_____ ¢</p>
<p>2)</p> 	<p>_____ ¢</p>
<div style="border: 2px solid red; padding: 20px;"> <h2 style="color: blue;">Preview</h2> <p style="color: blue; font-size: 1.2em;">Become a member to unlock unrestricted access to both printable and online worksheets.</p> <p style="color: blue;">www.tutoringhour.com</p>  </div>	
<p>3)</p> 	<p>_____ ¢</p>
<p>4)</p> 	<p>_____ ¢</p>
<p>5)</p> 	<p>_____ ¢</p>
<p>6)</p> 	<p>_____ ¢</p>
<p>7)</p> 	<p>_____ ¢</p>