







Counting Coins & Bills

Add up the total value of each set of bills and coins. Choose an item that costs exactly that amount and write the letter representing it.

A	B	C	D	E	F
					
\$25.15	\$16.81	\$7.75	\$53.27	\$30.29	\$11.05

1)

Preview

2)

Become a member to unlock
unrestricted access to both printable
and online worksheets.

3)

www.tutoringhour.com

4)



5)

