






Counting Pennies, Nickels, and Dimes

Answer Key

Count the coins in each set and write the total value in cents.

1)		<u>75</u> ¢
2)		<u>47</u> ¢
3)		<u>69</u> ¢
4)		<u>18</u> ¢
5)		<u>26</u> ¢

- 6) Trevor counted the coins in a coin pouch. There were 7 pennies, 6 nickels, and 5 dimes. How many cents were in the pouch?

87 cents

- 7) Nana gave Lee 2 dimes and a nickel, and Uncle Stu gave him a dime and 3 nickels. How much money did Lee receive altogether?

50 cents