






Counting Pennies, Nickels, and Dimes

Answer Key

Count the coins in each set and write the total value in cents.

1)		<u>61</u> ¢
2)		<u>34</u> ¢
3)		<u>12</u> ¢
4)		<u>66</u> ¢
5)		<u>57</u> ¢

- 6) If Jake paid 2 dimes and 5 pennies for a glass of lemonade at a charity fete, how many cents did the lemonade cost?

25 cents

- 7) Liana bought a mini watermelon and gave the shopkeeper 4 dimes, 10 nickels, and 9 pennies. How much did Liana pay?

99 cents