




Counting Pennies, Nickels, and Dimes

Count the coins in each set and write the total value in cents.

1)		_____ ¢	
2)		_____ ¢	
3)	<div style="border: 2px solid red; padding: 20px; text-align: center;"> <h2 style="color: blue;">Preview</h2> <p style="color: blue; font-weight: bold;">Become a member to unlock unrestricted access to both printable and online worksheets.</p> <p style="color: blue;">www.tutoringhour.com</p>  </div>		
4)			_____ ¢
5)			_____ ¢
			_____ ¢
			_____ ¢

- 6) If Jake paid 2 dimes and 5 pennies for a glass of lemonade at a charity fete, how many cents did the lemonade cost?

_____ cents

- 7) Liana bought a mini watermelon and gave the shopkeeper 4 dimes, 10 nickels, and 9 pennies. How much did Liana pay?

_____ cents