






Counting Pennies, Nickels, and Dimes

Count the coins in each set and write the total value in cents.

1)		_____ ¢
2)		_____ ¢
3)		_____ ¢
4)		_____ ¢
5)		_____ ¢

- 6) If Jake paid 2 dimes and 5 pennies for a glass of lemonade at a charity fete, how many cents did the lemonade cost?

_____ cents

- 7) Liana bought a mini watermelon and gave the shopkeeper 4 dimes, 10 nickels, and 9 pennies. How much did Liana pay?

_____ cents