






# Counting Pennies, Nickels, and Dimes

Answer Key

Count the coins in each set and write the total value in cents.

1)		<u>25</u> ¢
2)		<u>56</u> ¢
3)		<u>31</u> ¢
4)		<u>63</u> ¢
5)		<u>48</u> ¢

- 6) Lauren has 8 nickels, Kiera has 13 pennies, and Cassidy has a dime. How much money do they have in all?

63 cents

- 7) Bethany put 15 pennies and 3 nickels in her piggy bank. How much money did she put in the piggy bank?

30 cents