






























Making Change

Answer Key

Observe the money paid and the price of the product. Express the change using as few coins as possible.

<p>1)</p> 	 <p>9¢</p>	<p>3</p>  <p>1</p>  <p>1</p>  <p>1</p> 
<p>2)</p> 	 <p>70¢</p>	<p>1</p>  <p>0</p>  <p>1</p>  <p>0</p> 
<p>3)</p> 	 <p>25¢</p>	<p>3</p>  <p>0</p>  <p>0</p>  <p>0</p> 
<p>4)</p> 	 <p>81¢</p>	<p>0</p>  <p>1</p>  <p>1</p>  <p>4</p> 
<p>5)</p> 	 <p>12¢</p>	<p>3</p>  <p>1</p>  <p>0</p>  <p>3</p> 