

Subtracting Money


Subtract the discounted price from the original marked price and write the discount amount.

1)



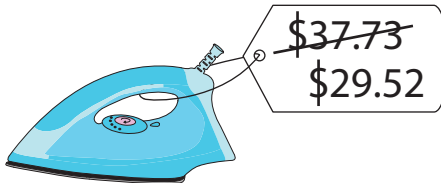
Discount: \$ _____

2)




Discount: \$ _____

3)



Discount: \$ _____

4)




Discount: \$ _____

5)



Discount: \$ _____

6)



Discount: \$ _____

- 7) A grocery store has slashed the price of apples from \$8.50 to \$6.25 per bag. How much is the discount per bag of apples?
