








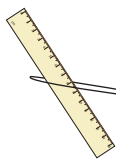

# Subtracting Money




**Answer Key**


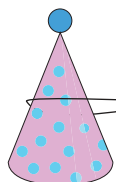

Subtract the price of the object from the money in each wallet and write the amount left after purchase.



1)  $67\text{¢}$    $-$    $55\text{¢}$   $=$   $12\text{¢}$  

2)  $10\text{¢}$    $-$    $9\text{¢}$   $=$   $1\text{¢}$  

3)  $23\text{¢}$    $-$    $12\text{¢}$   $=$   $11\text{¢}$  

4)  $75\text{¢}$    $-$    $73\text{¢}$   $=$   $2\text{¢}$  

5)  $38\text{¢}$    $-$    $24\text{¢}$   $=$   $14\text{¢}$  

6)  $59\text{¢}$    $-$    $36\text{¢}$   $=$   $23\text{¢}$  