
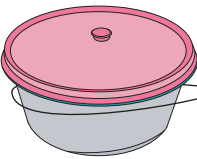







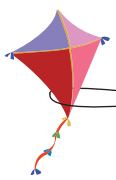

# Subtracting Money




Answer Key




Subtract the price of the object from the money in each wallet and write the amount left after purchase.



1)  $50\text{¢}$    $-$    $40\text{¢}$   $=$   $10\text{¢}$  

2)  $65\text{¢}$    $-$    $57\text{¢}$   $=$   $8\text{¢}$  

3)  $42\text{¢}$    $-$    $28\text{¢}$   $=$   $14\text{¢}$  

4)  $99\text{¢}$    $-$    $69\text{¢}$   $=$   $30\text{¢}$  

5)  $80\text{¢}$    $-$    $62\text{¢}$   $=$   $18\text{¢}$  

6)  $54\text{¢}$    $-$    $39\text{¢}$   $=$   $15\text{¢}$  