




Subtracting Money

- 1) Sandra had \$21 until she spent \$17 on a . How much money does Sandra have now?

- 2) Daren has \$99 in his wallet. He spends \$90 on a . How much money does he have left?

- 3) Michelle paid \$6 to buy a . If she had \$14 before the purchase, how much money does she have now?

- 4) Bethany visited a pet supply store and purchased a  for \$4. If she had \$30 before the purchase, how much money does Bethany have left now?

- 5) Lindsey has \$51. She spends \$33 on . How much money does she have left?
