


# Multiplication with Arrays

Answer Key

Count the number of rows and columns in each array and complete the multiplication sentence.

1)



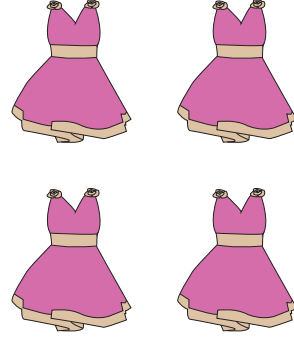
How many rows are there? 5

How many columns are there? 5

Multiplication Sentence:

$$\boxed{5} \times \boxed{5} = \boxed{25}$$

2)



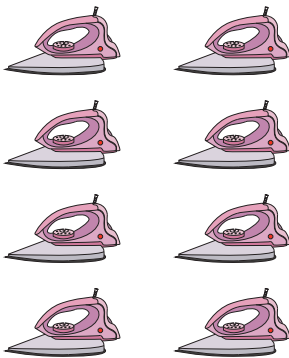
How many rows are there? 2

How many columns are there? 2

Multiplication Sentence:

$$\boxed{2} \times \boxed{2} = \boxed{4}$$

3)



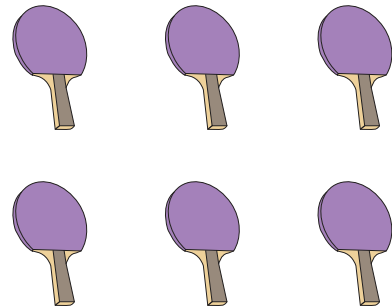
How many rows are there? 4

How many columns are there? 2

Multiplication Sentence:

$$\boxed{4} \times \boxed{2} = \boxed{8}$$

4)



How many rows are there? 2

How many columns are there? 3

Multiplication Sentence:

$$\boxed{2} \times \boxed{3} = \boxed{6}$$