


Multiplication with Arrays

Answer Key

Count the number of rows and columns in each array and complete the multiplication sentence.

1)



How many rows are there?

4

How many columns are there?

3

Multiplication Sentence:

4

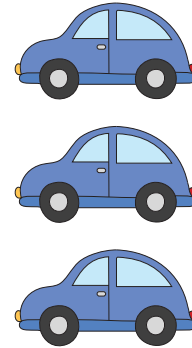
×

3

=

12

2)



How many rows are there?

3

How many columns are there?

1

Multiplication Sentence:

3


×

1

=

3

3)



How many rows are there?

5

How many columns are there?

4

Multiplication Sentence:

5


×

4

=

20

4)



How many rows are there?

3

How many columns are there?

5

Multiplication Sentence:

3

×

5

=

15