


# Multiplication with Arrays

Count the number of rows and columns in each array and complete the multiplication sentence.

1)




How many rows are there?

How many columns are there?

Multiplication Sentence:

  $\times$   = 

2)




How many rows are there?

How many columns are there?

Multiplication Sentence:

  $\times$   = 

3)




How many rows are there?

How many columns are there?

Multiplication Sentence:

  $\times$   = 

4)



How many rows are there?

How many columns are there?

Multiplication Sentence:

  $\times$   =