



Ordered Pairs | Drawing Shapes

Plot the points and join them in the given order. Complete each figure by connecting the start and endpoints. Identify the shape formed.

1) $(7, 8), (9, 6), (8, 3), (6, 3), (5, 6)$



2) $(5, 8), (9, 4), (5, 1)$



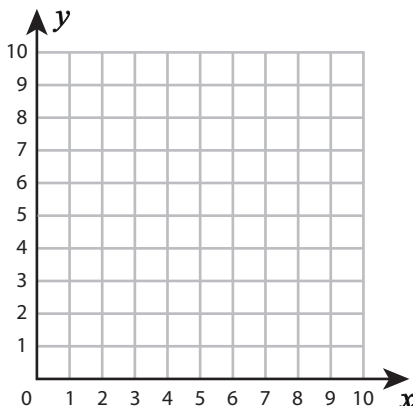
Preview

Become a member to unlock
unrestricted access to both printable
and online worksheets.



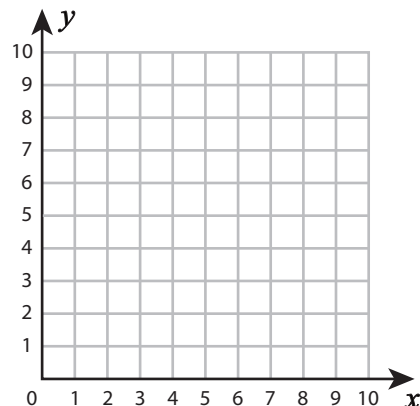
www.tutoringhour.com

3) $(1, 8), (9, 8), (9, 4), (1, 4)$



Shape: _____

6) $(2, 7), (9, 7), (9, 4), (2, 4)$



Shape: _____