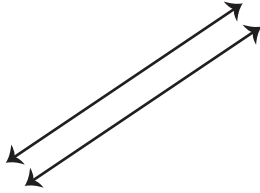


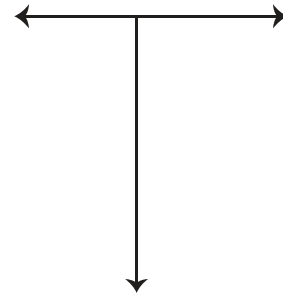
Parallel and Perpendicular Lines

Determine whether each pair of lines is parallel or perpendicular.

1)



2)



3)

Preview

Become a member to unlock
unrestricted access to both printable
and online worksheets.

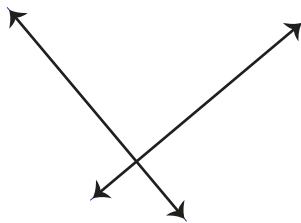


www.tutoringhour.com

5)



7)



8)

