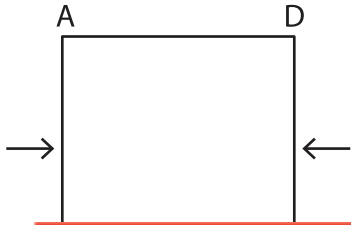


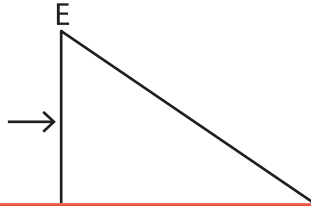
Parallel and Perpendicular Lines in Shapes

Using symbols (\parallel or \perp), write the relation between the pairs of lines indicated by the arrows in each shape.

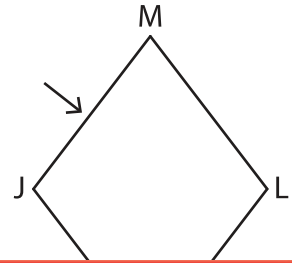
1)



2)



3)



4)

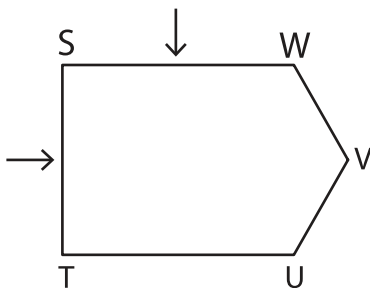
Preview

**Become a member to unlock
unrestricted access to both printable
and online worksheets.**

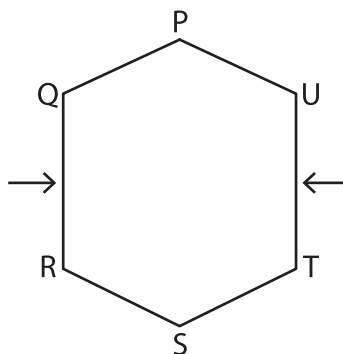


www.tutoringhour.com

7)



8)



9)

