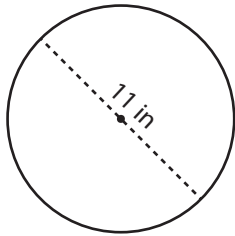


Circumference of a Circle

Answer Key

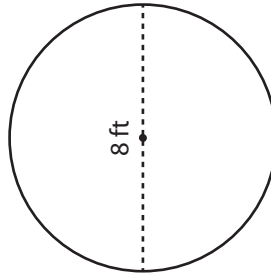
Find the circumference of each circle. Round your answer to the nearest tenth. (Use 3.14 for π .)

1)



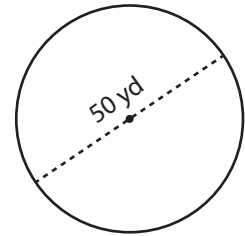
34.5 in

2)



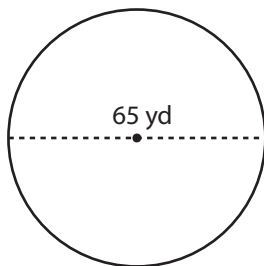
25.1 ft

3)



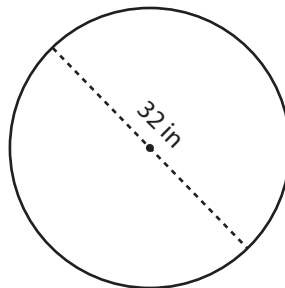
157 yd

4)



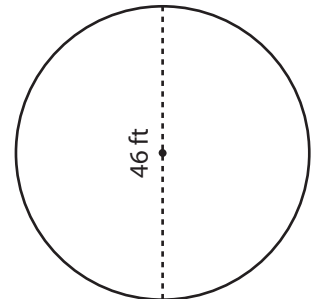
204.1 yd

5)



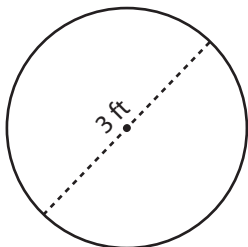
100.5 in

6)



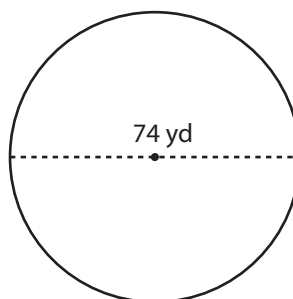
144.4 ft

7)



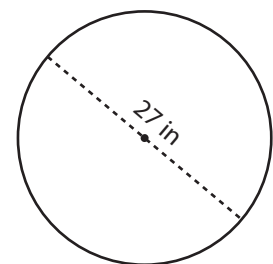
9.4 ft

8)



232.4 yd

9)



84.8 in