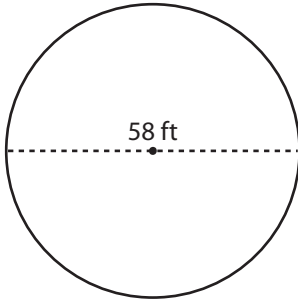


Circumference of a Circle

Answer Key

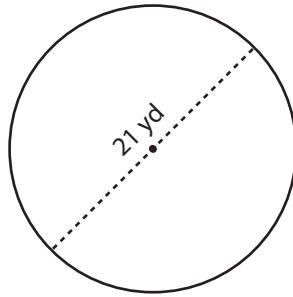
Find the circumference of each circle. Round your answer to the nearest tenth. (Use 3.14 for π .)

1)



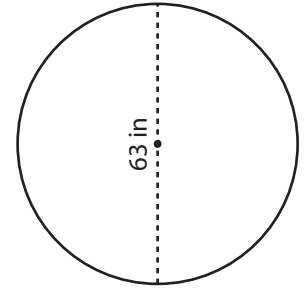
182.1 ft

2)



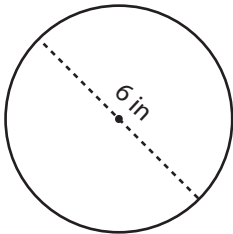
65.9 yd

3)



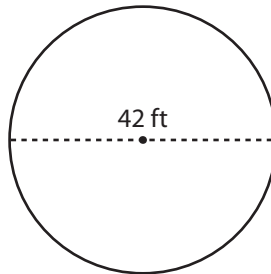
197.8 in

4)



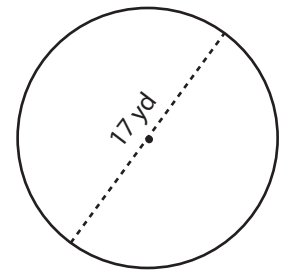
18.8 in

5)



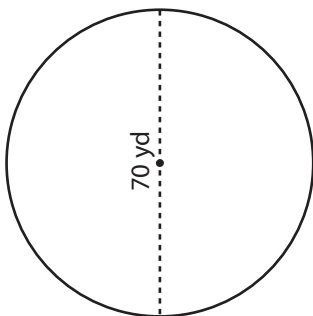
131.9 ft

6)



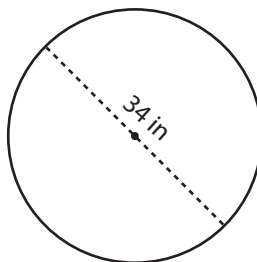
53.4 yd

7)



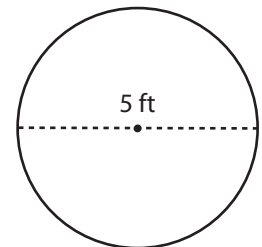
219.8 yd

8)



106.8 in

9)



15.7 ft