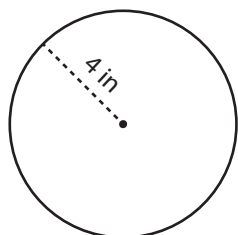


Circumference of a Circle

Answer Key

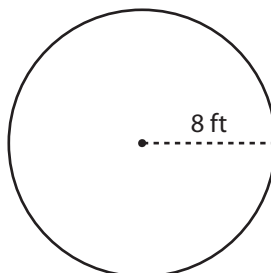
Find the circumference of each circle. Express your answer in terms of π .

1)



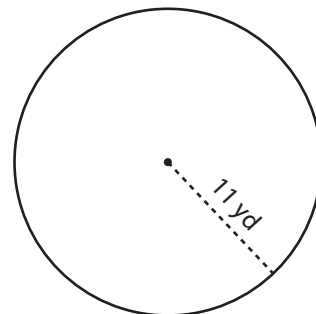
 8π in

2)



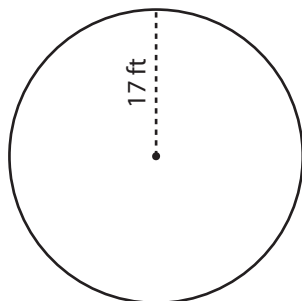
 16π ft

3)



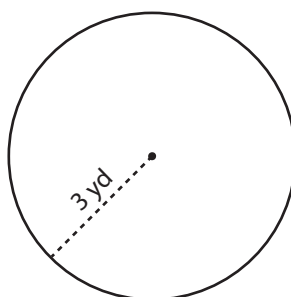
 22π yd

4)



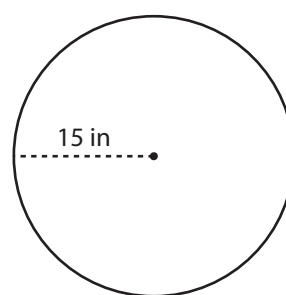
 34π ft

5)



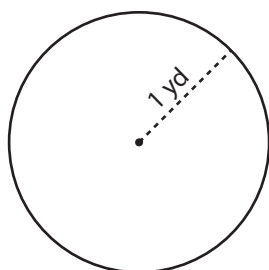
 6π yd

6)



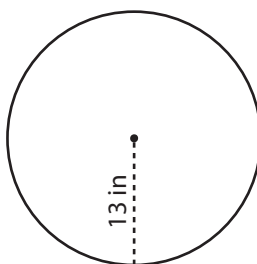
 30π in

7)



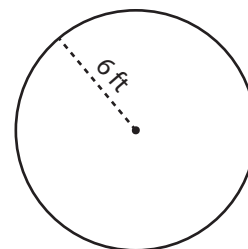
 2π yd

8)



 26π in

9)



 12π ft