

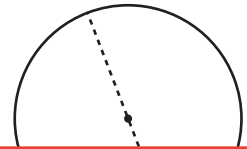
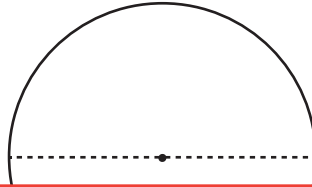
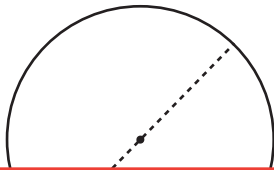
Finding the Diameter Using the Circumference

Find the diameter of each circle using the given circumference. Round your answer to the nearest tenth. (Use 3.14 for π .)

1) Circumference: 34 ft

2) Circumference: 117.3 yd

3) Circumference: 15.7 in



Preview

Become a member to unlock
unrestricted access to both printable
and online worksheets.



www.tutoringhour.com

4) Cir

7) Circumference: 109.9 yd

8) Circumference: 95 in

9) Circumference: 66.1 ft

