

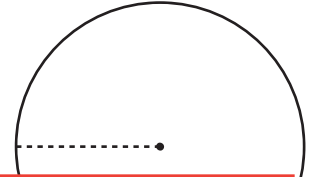
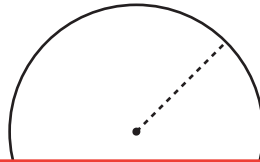
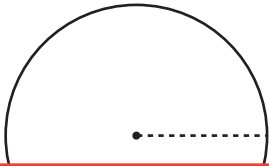
# Finding the Radius Using the Circumference

Find the radius of each circle using the given circumference. Round your answer to the nearest tenth. (Use 3.14 for  $\pi$ .)

1) Circumference: 40.8 in

2) Circumference: 52 yd

3) Circumference: 101.7 ft



## Preview

Become a member to unlock  
unrestricted access to both printable  
and online worksheets.



[www.tutoringhour.com](http://www.tutoringhour.com)

4) Cir

7) Circumference: 60.5 ft

8) Circumference: 74.4 in

9) Circumference: 119 yd

