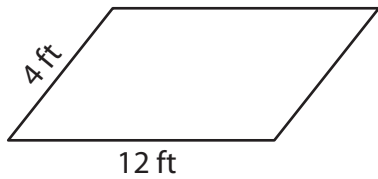


Perimeter of a Parallelogram

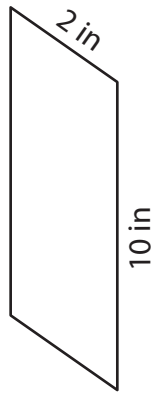
Find the perimeter of each parallelogram.

1)



Perimeter = _____

2)



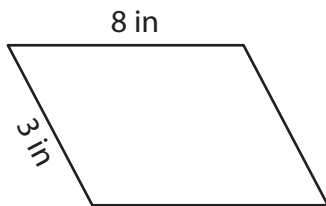
Perimeter = _____

3)



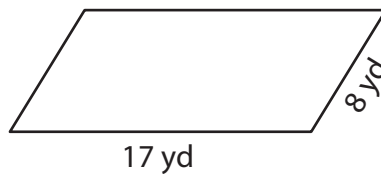
Perimeter = _____

4)



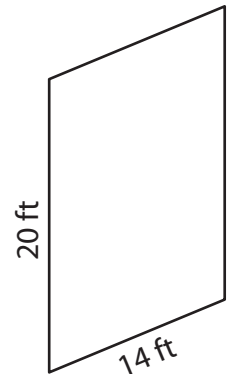
Perimeter = _____

5)



Perimeter = _____

6)



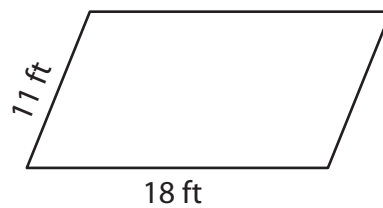
Perimeter = _____

7)



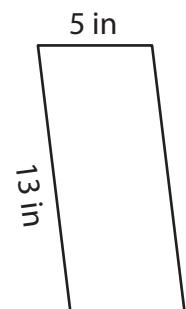
Perimeter = _____

8)



Perimeter = _____

9)



Perimeter = _____