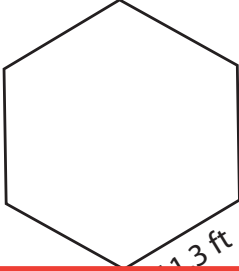



# Perimeter of a Polygon

Find the perimeter of each regular polygon.

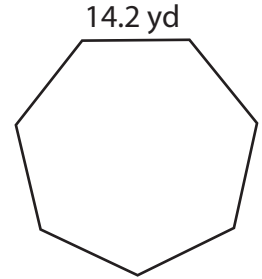
1)



2)



3)



Peri

# Preview

4)

Become a member to unlock  
unrestricted access to both printable  
and online worksheets.

Peri

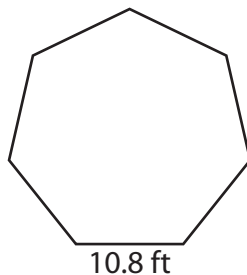


www.tutoringhour.com

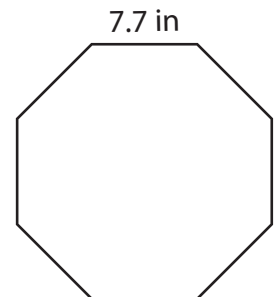
7)



8)



9)



Perimeter = \_\_\_\_\_

Perimeter = \_\_\_\_\_

Perimeter = \_\_\_\_\_