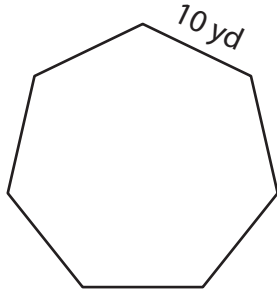


Perimeter of a Polygon

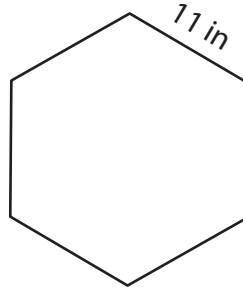
Answer Key

Find the perimeter of each regular polygon.

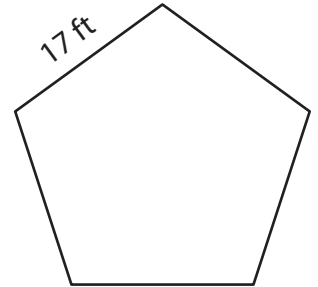
1)

Perimeter = 70 yd

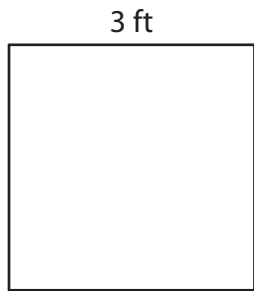
2)

Perimeter = 66 in

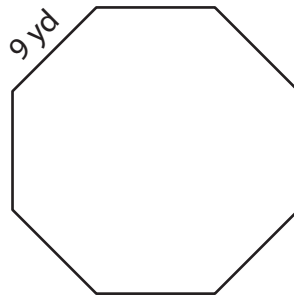
3)

Perimeter = 85 ft

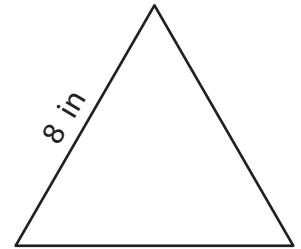
4)

Perimeter = 12 ft

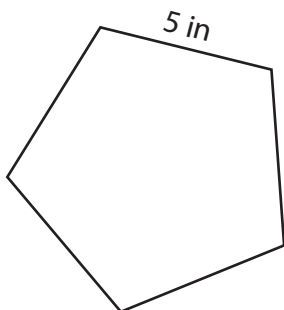
5)

Perimeter = 72 yd

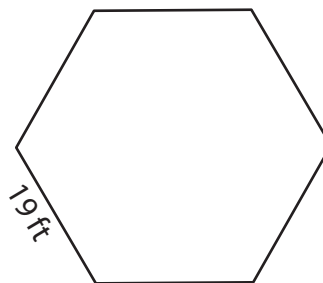
6)

Perimeter = 24 in

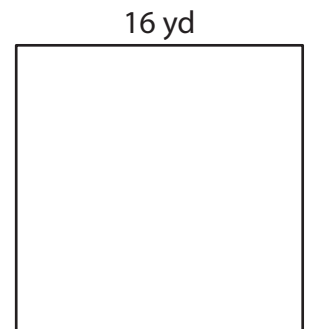
7)

Perimeter = 25 in

8)

Perimeter = 114 ft

9)

Perimeter = 64 yd