


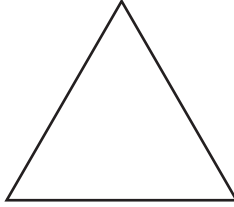
Polygons | Finding the Side Lengths

Find the side length of each regular polygon.

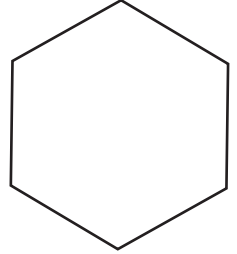
1)



2)



3)



4)

N
Leng

Preview

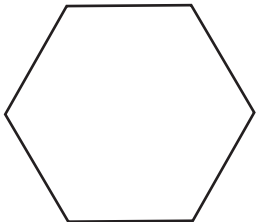
Become a member to unlock
unrestricted access to both printable
and online worksheets.



N
Leng

www.tutoringhour.com

7)




Perimeter = 66 ft

Number of sides = _____

Length of each side = _____

8)

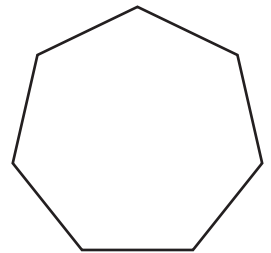


Perimeter = 104 yd

Number of sides = _____

Length of each side = _____

9)



Perimeter = 63 in

Number of sides = _____

Length of each side = _____