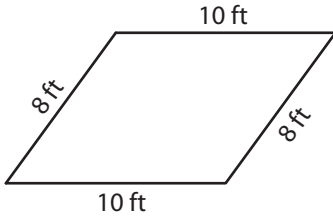


# Perimeter of a Quadrilateral

Answer Key

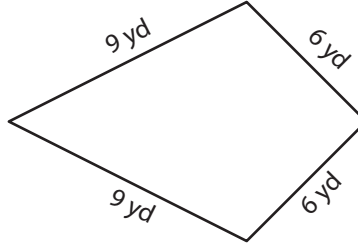
Find the perimeter of each quadrilateral.

1)



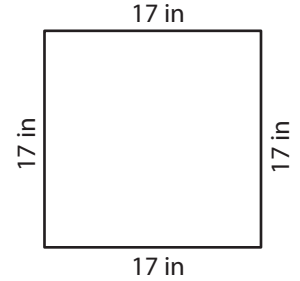
Perimeter = 36 ft

2)



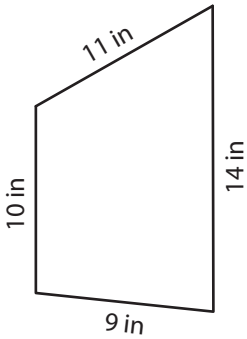
Perimeter = 30 yd

3)



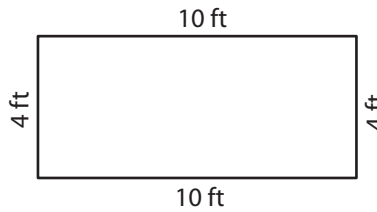
Perimeter = 68 in

4)



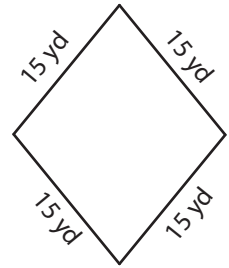
Perimeter = 44 in

5)



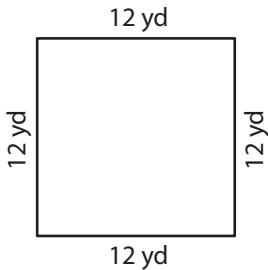
Perimeter = 28 ft

6)



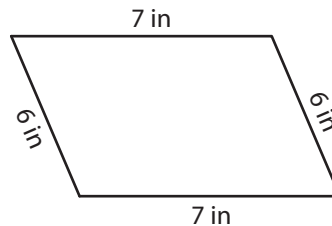
Perimeter = 60 yd

7)



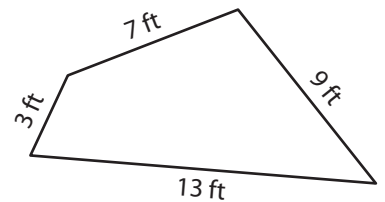
Perimeter = 48 yd

8)



Perimeter = 26 in

9)



Perimeter = 32 ft