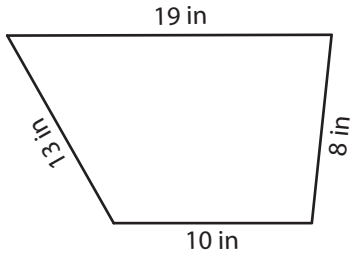


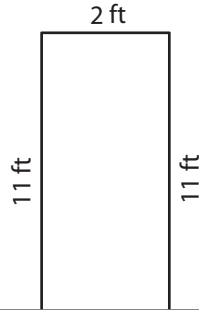
Perimeter of a Quadrilateral

Find the perimeter of each quadrilateral.

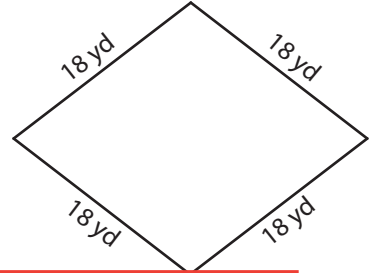
1)



2)



3)



Peri

Preview

4)

Become a member to unlock
unrestricted access to both printable
and online worksheets.

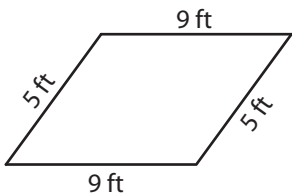
Peri

www.tutoringhour.com

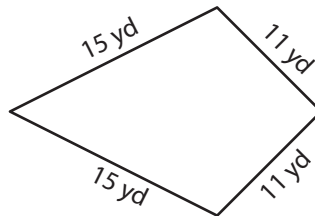


11 ft

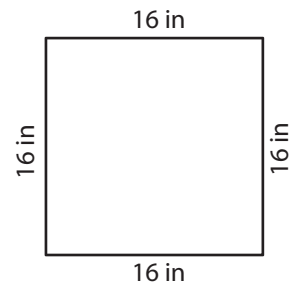
7)



8)



9)



Perimeter = _____

Perimeter = _____

Perimeter = _____