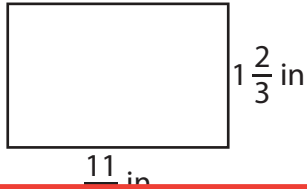


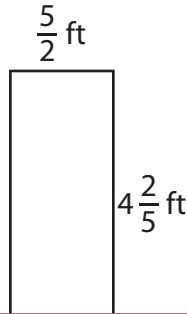
# Perimeter of a Rectangle

Find the perimeter of each rectangle.

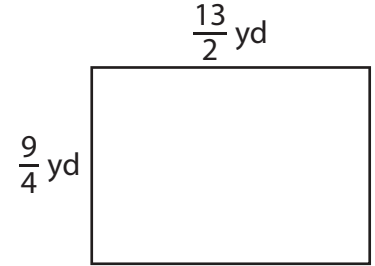
1)



2)



3)



Perim

## Preview

4)

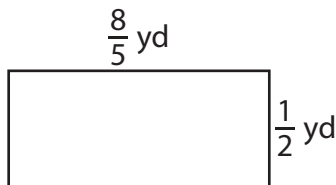
Become a member to unlock  
unrestricted access to both printable  
and online worksheets.



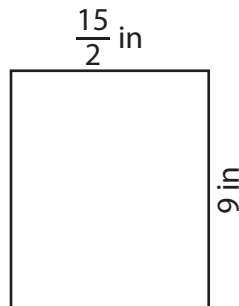
Perim

[www.tutoringhour.com](http://www.tutoringhour.com)

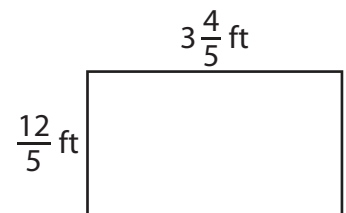
7)



8)



9)



Perimeter = \_\_\_\_\_

Perimeter = \_\_\_\_\_

Perimeter = \_\_\_\_\_