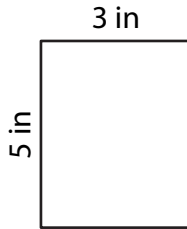


# Perimeter of a Rectangle

Answer Key

Find the perimeter of each rectangle.

1)



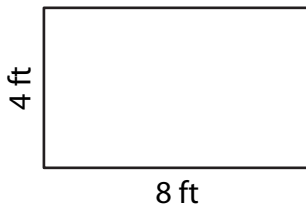
Perimeter = 16 in

2)



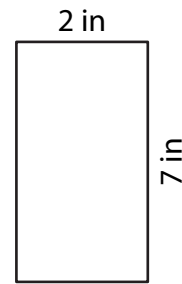
Perimeter = 30 yd

3)



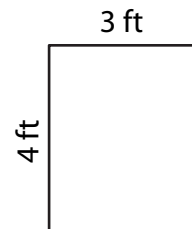
Perimeter = 24 ft

4)



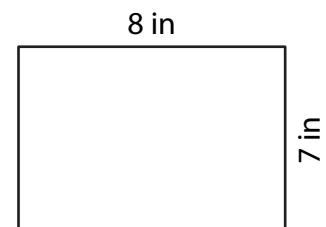
Perimeter = 18 in

5) A rectangular window is 4 feet tall and 3 feet wide. How many feet of wood are needed to frame the window?



14 feet

6) Sarah is framing a rectangular photograph measuring 8 inches in length and 7 inches in width. What is the total length of the frame required to cover the picture?



30 inches