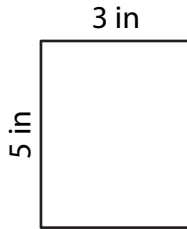


Perimeter of a Rectangle

Find the perimeter of each rectangle.

1)



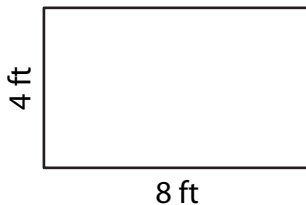
Perimeter = _____

2)



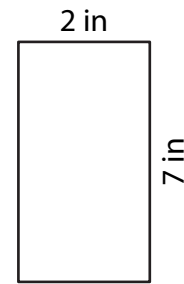
Perimeter = _____

3)



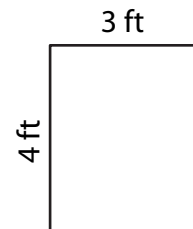
Perimeter = _____

4)



Perimeter = _____

- 5) A rectangular window is 4 feet tall and 3 feet wide. How many feet of wood are needed to frame the window?



- 6) Sarah is framing a rectangular photograph measuring 8 inches in length and 7 inches in width. What is the total length of the frame required to cover the picture?

