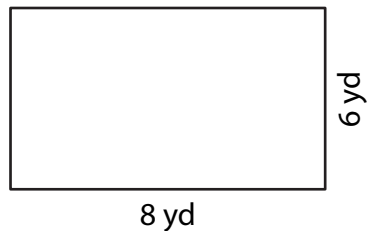


Perimeter of a Rectangle

Answer Key

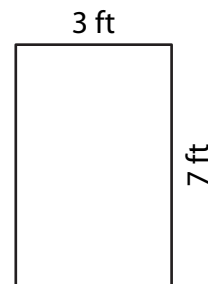
Find the perimeter of each rectangle.

1)



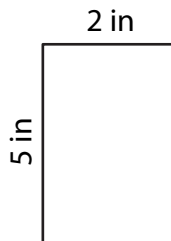
Perimeter = 28 yd

2)



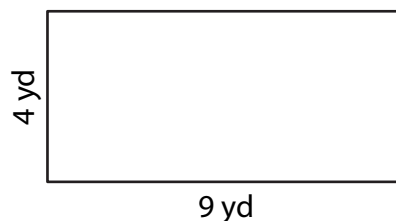
Perimeter = 20 ft

3)



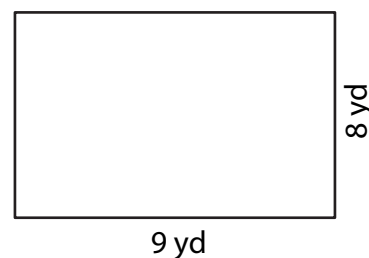
Perimeter = 14 in

4)



Perimeter = 26 yd

- 5) The school playground is rectangular and measures 9 yards in length and 8 yards in width. How many yards of fencing will be required to enclose the playground?



34 yards

- 6) A rectangular bulletin board measures 3 feet in length and 2 feet in width. How many feet of border material will be needed to frame the bulletin board?



10 feet