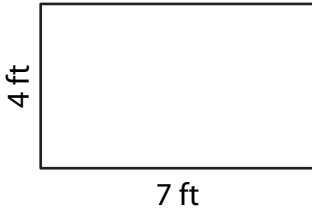


Perimeter of a Rectangle

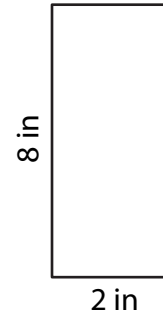
Find the perimeter of each rectangle.

1)



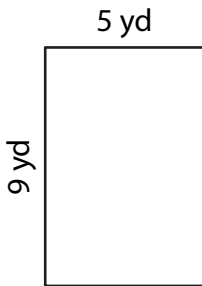
Perimeter = _____

2)



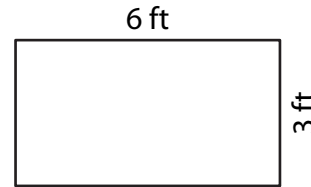
Perimeter = _____

3)



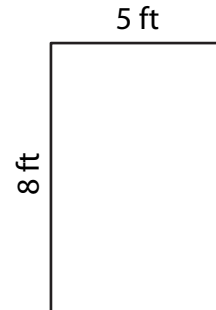
Perimeter = _____

4)



Perimeter = _____

- 5) A rectangular billboard measures 8 feet in length and 5 feet in width. What is the perimeter of the billboard?



- 6) Mr. Brown has a rectangular garden that is 9 yards long and 7 yards wide. He wants to place a path around the garden. What is the total length of the path?

