



Finding the Length or Width from Perimeter

Find the length or width of each rectangle.

1) Perimeter = 38 yd

2) Perimeter = 44 in

3) Perimeter = 72 ft



Length = _____

Preview

4) Perimeter = _____

Become a member to unlock
unrestricted access to both printable
and online worksheets.




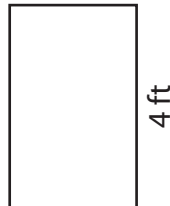

Width = _____

www.tutoringhour.com

7) Perimeter = 58 in

8) Perimeter = 12 ft

9) Perimeter = 64 yd



Length = _____

Width = _____

Length = _____