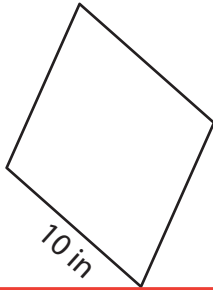



# Perimeter of a Rhombus

Find the perimeter of each rhombus.

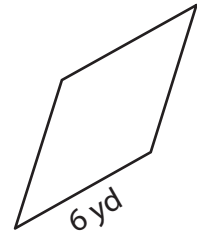
1)



2)



3)



Per

## Preview

4)

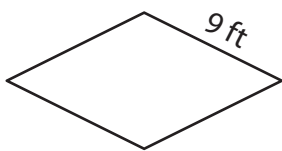
Become a member to unlock  
unrestricted access to both printable  
and online worksheets.



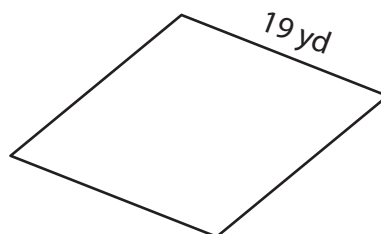
Per

www.tutoringhour.com

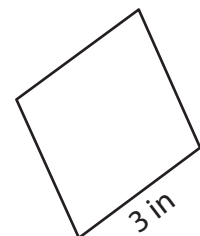
7)



8)



9)



Perimeter = \_\_\_\_\_

Perimeter = \_\_\_\_\_

Perimeter = \_\_\_\_\_