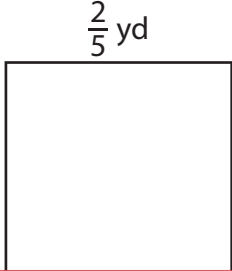



Perimeter of a Square

Find the perimeter of each square.

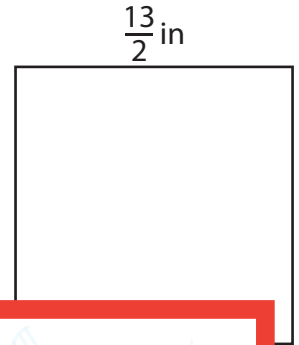
1)



2)



3)



Peri

Preview

4)


Become a member to unlock
unrestricted access to both printable
and online worksheets.



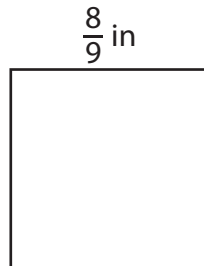
Peri

www.tutoringhour.com


7)



8)



9)



Perimeter = _____

Perimeter = _____

Perimeter = _____